



Sweet Shop Estimation

Guess the amount of sweets in the jar. Then count the sweets and write down the answer.



Estimate _____

Answer _____




Estimate _____

Answer _____



Estimate _____

Answer _____



Estimate _____

Answer _____



Estimate _____


Answer _____



Estimate _____

Answer _____

Sweet Shop Estimation



Estimate _____

Answer _____



Estimate _____

Answer _____



Estimate _____

Answer _____




Estimate _____

Answer _____



Estimate _____

Answer _____



Estimate _____

Answer _____